

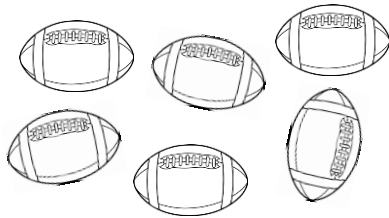
Starburst 2 - Kindergarten

Tally Marks


KEY

Graders: 25 Point total. Half point for each solution.


Use tally marks to show the number of objects in each group.




||||| I



||||| |||



||||| II




||||| ||| I

What is the sum of the 4 groups together?

32 or ||||| ||||| ||||| ||||| ||||| ||||| II

Draw pictures to show this many objects.



What is the value of each set of tally marks?

<u>6</u>		<u>4</u>	
<u>12</u>		<u>22</u>	
<u>18</u>		<u>14</u>	
<u>20</u>		<u>23</u>	

Use tally marks to count the number of each item in your home. You can use another sheet of paper if you need it.

Household Items		
Item	Tally	Number
Forks	<div>Answers will vary. Check for completion and accuracy. Use your best judgement.</div>	
Beds		
Lamps		
Chairs		
Tables		

Which item do you have the most of?

Answers will vary.
Use your best judgement.

Use the clues and tally marks to complete the table below.

Marcus has twice as many cows as pigs.

Marcus has six pigs.

Marcus has half the number of horses as he has pigs.

Marcus has five more sheep than chickens.

Marcus has four more chickens than pigs.

Marcus's Farm Animals		
Animal	Tally Marks	
Horse		= 3
Sheep		= 15
Chicken		= 10
Pig		= 6
Cow		= 12