

Oak Grove Math Superstars

Due Dates:



Session	Last Monday of
1	September
2	October
3	November
4	January
5	February
6	March

Grade K

Session 5 - Answers

(50 points total; 10 points deducted if late)

(1 point partial credit given for effort if answer is incorrect)

1. (10 points)

A banana weighs 20 ounces.

(a) If you cut the banana to 2 equal halves, how much does one half of a banana weigh?

10

(b) If you cut the banana to 4 equal pieces, how much does each piece weigh? _____

5

2. (5 points if both answers present, 3 if only 1 answer)

Kate, Nathan and Julie each had 12 grapes on their plate at the beginning of a party. At end of the party, Kate had 1 grape left, Nathan had 3 grapes left and Julie had 5 grapes left. Who ate the most grapes and how many?

Answer: 11, Kate

3. (5 points)

Lulu has just transferred to a new school. Her mom took her to the new class. There were 24 students including Lulu in her new class. Lulu shook hands with every student in her class. How many hands did she shake? 23

4. (5 points)

Max wants to build a wall shown below with bricks. How many bricks does he need?



Answer: ____ **15** _____

5. (5 points)

△ weighs the same as ○○○

How many ○ do 3 △ weigh? Answer: ____ **9** _____

6. (15 points)

Pam, Carl, and Rita all have to visit the doctor on the same day. Rita is first. She will see the doctor 2 hours before noon. Pam sees the doctor 3 hours after Rita. Carl is last and will see the doctor 1 hour before he closes at 5:00 p.m. Write the times each person will see the doctor. Make sure you use numbers, a colon (:), and circle “a.m.” or “p.m.” after each time.

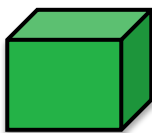
Rita: ____ **10:00** _____ **a.m.**

Pam: ____ **1:00** _____ **p.m.**

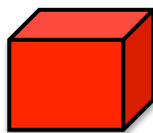
Carl: ____ **4:00** _____ **p.m.**

7. (5 points)

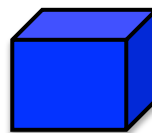
Find the right color and color the boxes. The boxes are Green, Red and Blue. All the colors below the boxes are wrong.



Green



Red



Blue