

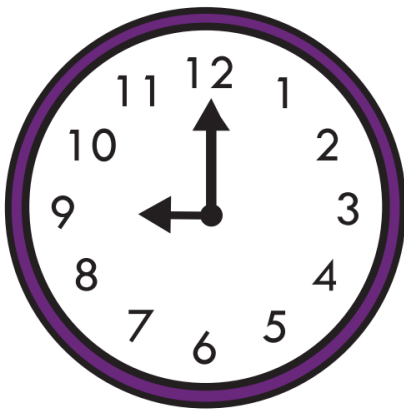
Starburst 3 Kindergarten

Telling Time

Name:

Class:

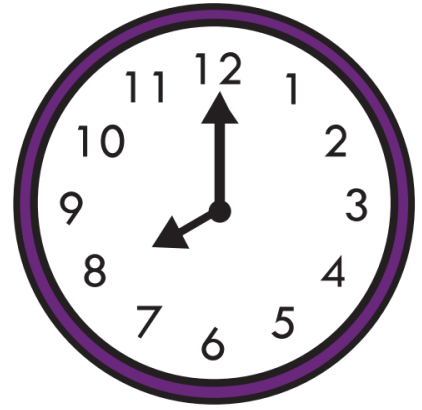
Graders: Each Solution is worth 1 point. Two points available for partial credit for word problems. Use your best judgement. 25 Points total.



9:00



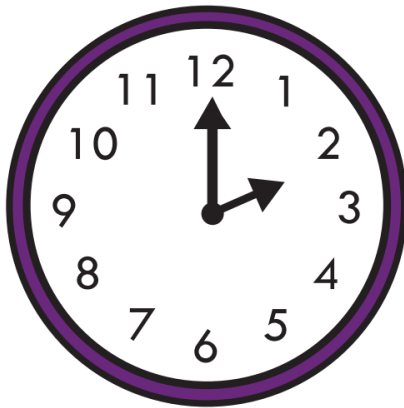
11:00



8:00



3:00


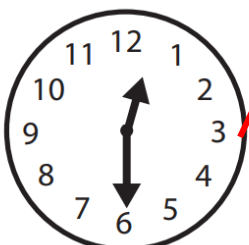
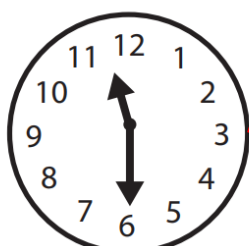
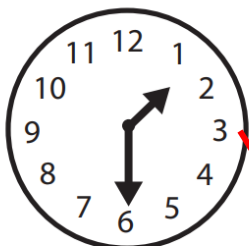

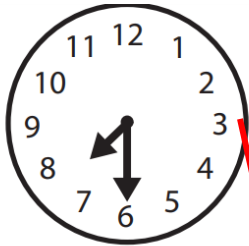


2:00



5:00

Draw a line between the correct time on the clocks.



11:30

2:30

4:30

7:30

12:30

3:30

9:30

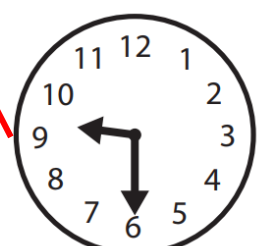
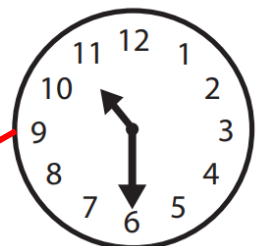
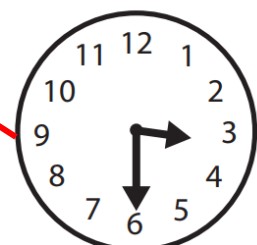
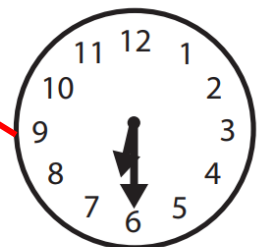
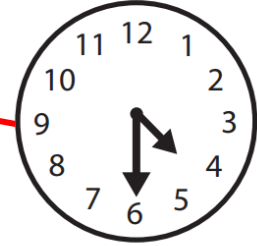
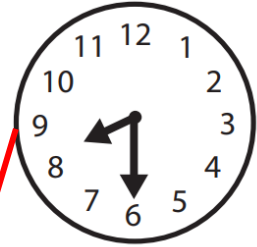
5:30

1:30

8:30

10:30

6:30





Darcy started making finger puppets at 4 o'clock. Three hours later she finished them. What time was it when she finished?

7:00 or 7 o'clock or 7

All three forms are acceptable for all answers



Tamara waited for the train to arrive at 6 o'clock. The train was delayed for 4 hours. What time did the train finally arrive?

10:00



The musician started her practice routine at 10 o'clock and finished five hours later. What time did she finish?


3:00



The businessman walked into the meeting room at 7 o'clock. Two hours later he took his lunch break for one hour. After that, he continued the meeting for two more hours. What time did the meeting finish?

12:00

$(7+2+1+2)$



The bakery opens at 9 o'clock. If it stays open for 8 hours, what time does it close?

5:00