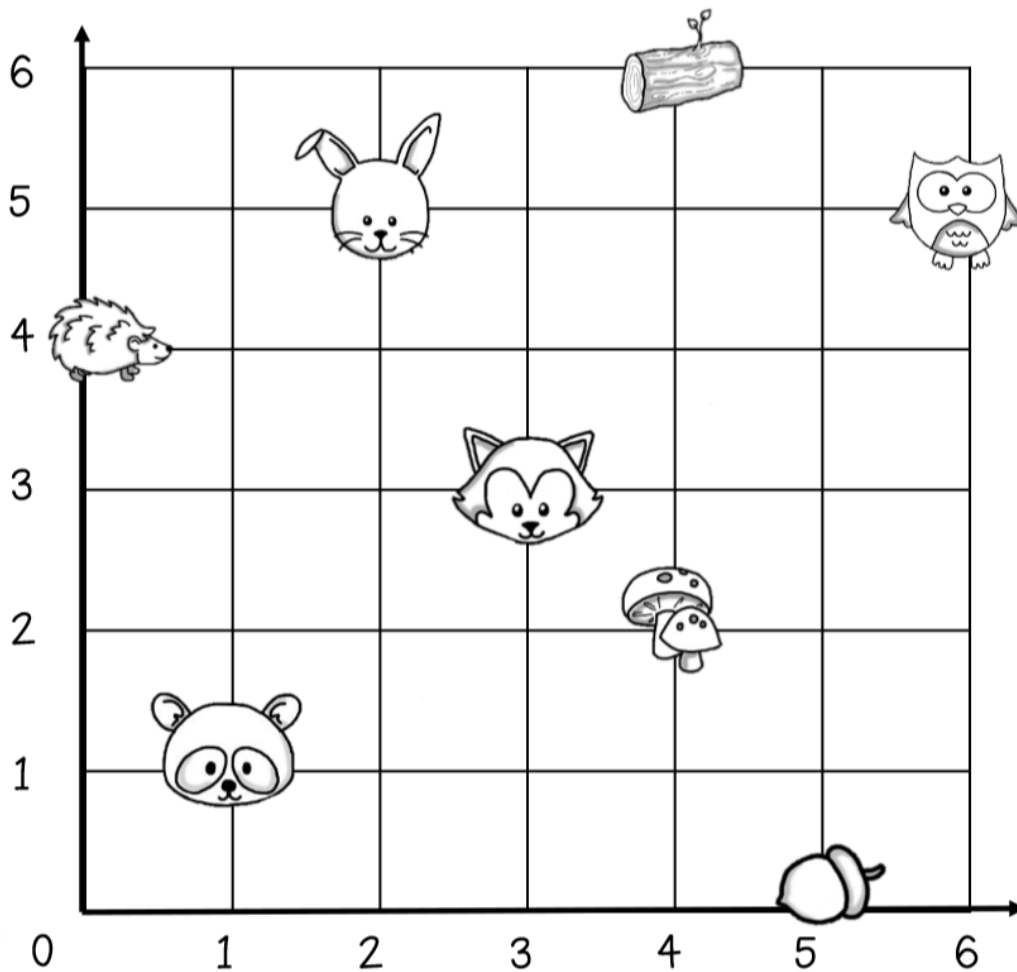










Name: _____

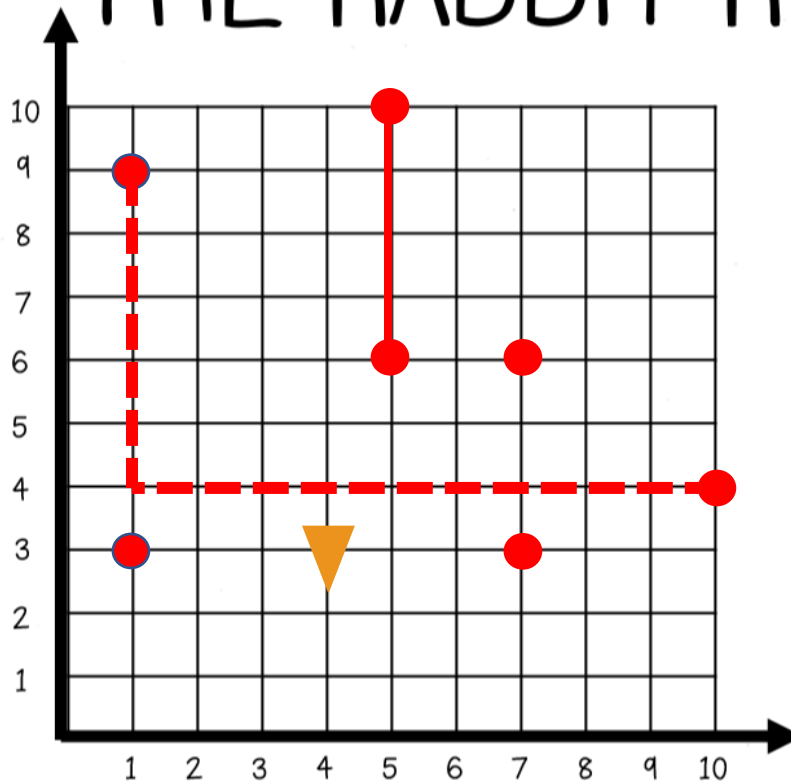
Graders: 25 points total. Each action is worth about $\frac{1}{2}$ point. Some answers will vary. Use your best judgement. Give partial credit when you can.

Write the ordered pair that tells where each picture can be found.
Remember, run \Rightarrow before you jump \uparrow .



	<u>4</u> , <u>2</u>		<u>0</u> , <u>4</u>
	<u>2</u> , <u>5</u>		<u>6</u> , <u>5</u>
	<u>1</u> , <u>1</u>		<u>3</u> , <u>3</u>
	<u>5</u> , <u>0</u>		<u>4</u> , <u>6</u>

THE RABBIT ROAMS



☐ = 1 yard



Plot and label the following locations that the rabbit visits:

- ☐ burrow (1, 3) ☐ vegetable patch (1, 9) ☐ lake (7, 3) ☐ raspberry bush (7, 6)
- ☐ hay stack (10, 4) ☐ fence from (5, 10) to (5, 6)

6 yards

9 yards

Dashed line above is one option.
Answers may vary.
Path above = 14 yards.

Carrot (4,3)

(5,10),(5,2) Answers can vary. The length should be 8 yards.

Answers will vary. Likely center and right, close to raspberry bush and haystack.